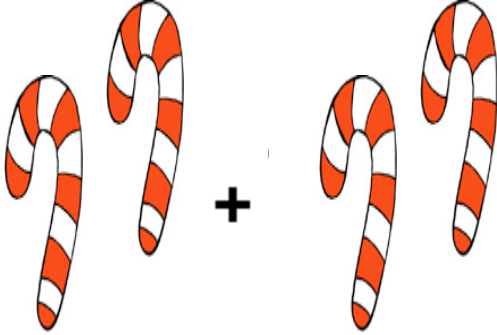


Addition


Count the objects in each box. Write the answer under the line.

$$\begin{array}{r} 2 \\ +2 \\ \hline \end{array}$$



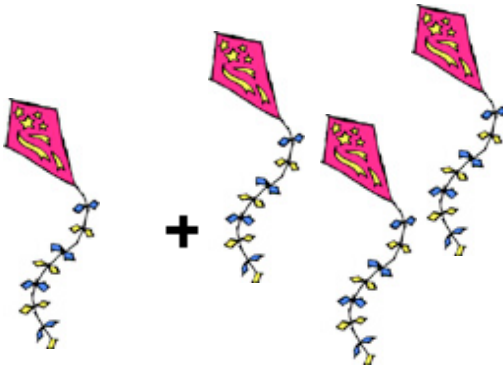
2 canes + 2 canes

$$\begin{array}{r} 1 \\ +4 \\ \hline \end{array}$$



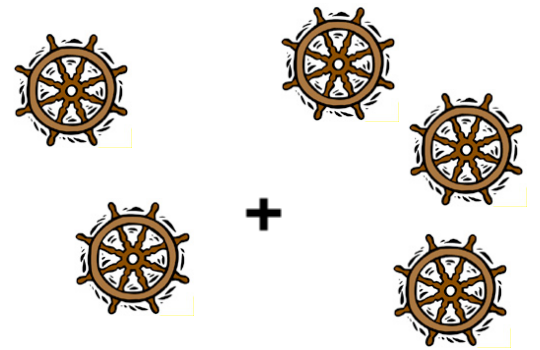
1 flag + 4 flags

$$\begin{array}{r} 1 \\ +3 \\ \hline \end{array}$$



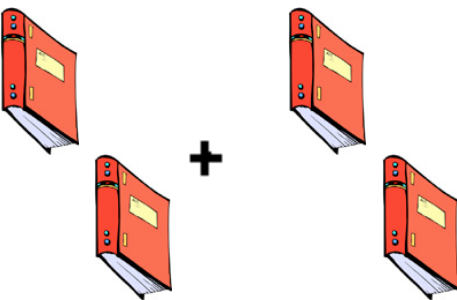
1 kite + 3 kites

$$\begin{array}{r} 2 \\ +3 \\ \hline \end{array}$$




2 wheels + 3 wheels

$$\begin{array}{r} 2 \\ +2 \\ \hline \end{array}$$



2 books + 2 books

$$\begin{array}{r} 2 \\ +1 \\ \hline \end{array}$$



2 chair + 1 chair